

Write the number that is squared and the square number for each of these diagrams.



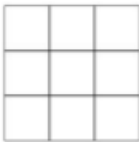
Number Squared: 1

Square Number: 1



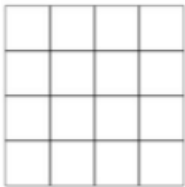
2

4



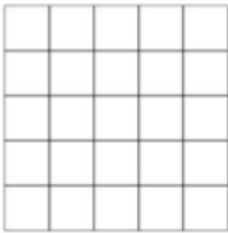
          







Number Squared:           



Square Number:           



Write the number that is cubed and the cube number for each of these diagrams.




Number Cubed: 1

Cube Number: 1




          




          







Number Cubed:           



Cube Number:           



7

343